




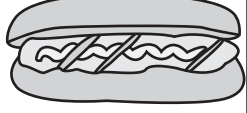




Name : \_\_\_\_\_

Score : \_\_\_\_\_

# Counting Coins

Up to Quarters: \$1

Count the coins and find the cost of each item.

1) 	\$ _____ 
2) 	\$ _____ 
3) 	\$ _____ 
4) 	\$ _____ 

5) Carl has 3 nickels, 2 quarters and 5 dimes. How much money does he have?

\$ \_\_\_\_\_

6) Jack bought a chicken with 2 nickels, 3 quarters, and 4 dimes. How much did the chicken cost?

\$ \_\_\_\_\_

Name : \_\_\_\_\_




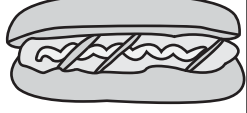




Score : \_\_\_\_\_

## Answer key

# Counting Coins

Up to Quarters: 51

Count the coins and find the cost of each item.

1) 	\$ <u>1.15</u>	
2) 	\$ <u>2.26</u>	
3) 	\$ <u>0.95</u>	
4) 	\$ <u>3.47</u>	

5) Carl has 3 nickels, 2 quarters and 5 dimes. How much money does he have?

\$ 1.15

6) Jack bought a chicken with 2 nickels, 3 quarters, and 4 dimes. How much did the chicken cost?

\$ 1.25